

Questions to ask when reading graphs:

- Is there an upward or downward trend?
- Are there any sudden spikes in the graph?
- What is being compared in the graph?
- What prediction can I make for the future?
- What inferences can I make about the graph?

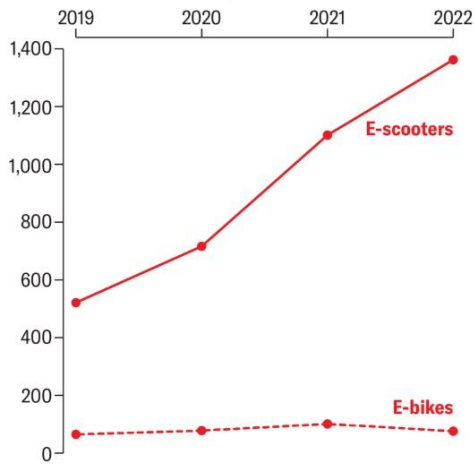
Analyze the graphs below and write a reflection on what you think the graphs are communicating to you. To guide you with your response, start with some observations.

- What is the topic of the graph?
- What quantities are being compared?
- What are some observations that you can make based on the graphs?
- What surprises you about the graph? What do you wonder?
- What do you foresee happening in the next 10 years?

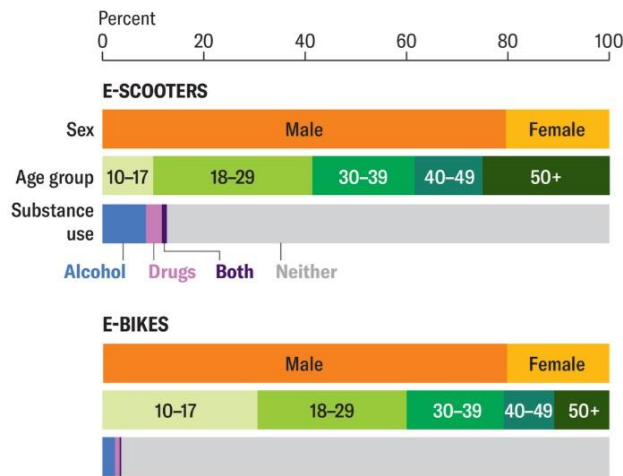
A Snapshot of Recent E-Scooter and E-Bike Injury Data

The values shown on the charts reflect 4,020 emergency department visits that researchers analyzed for a new study.

Emergency Department Visits per Year for E-Scooter or E-Bike Injuries



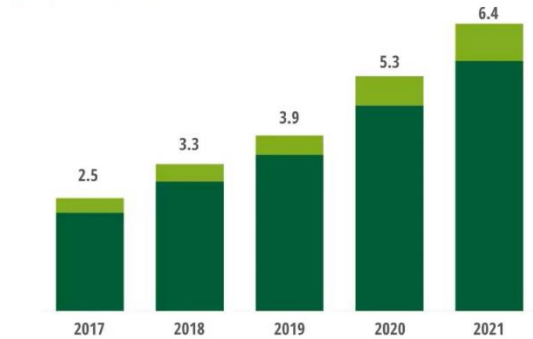
Patient Demographics and Substance Use



Amanda Montañez; Source: "Alcohol-Related Injuries from E-Scooter and E-Bike Use in the US (2019-2022): A Retrospective Study," by Edwin Akomaning et al., in *Injury Prevention*. Published online December 9, 2024 (data)

Total e-bike sales in North America and Europe almost doubled during 2018-2021 to surpass six million units in 2021

Annual e-bike sales (million units), 2017-2021
■ Europe ■ North America



Note: 2021 is an estimated value. For the purposes of this figure, North America includes the United States and Canada; Europe includes 30 countries in the region.
Source: Deloitte analysis based on data sourced from multiple secondary industry sources.
Deloitte Insights | deloitte.com/insights